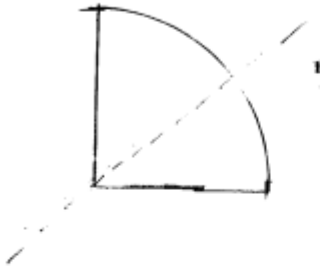


Symmetry

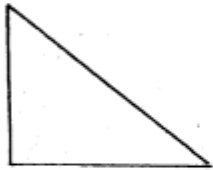
Solution - 01 :-

(i)



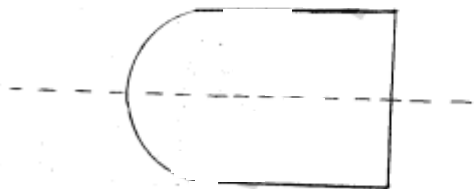
one Line of symmetry.

(ii)



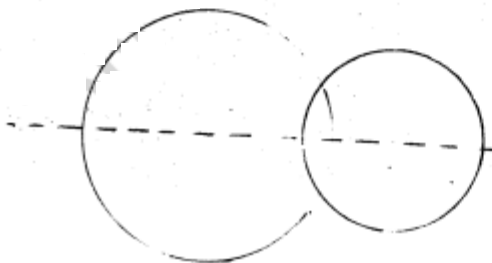
No Line of symmetry - None.

(iii)



one Line of symmetry

(iv)



one Line of symmetry

(v)



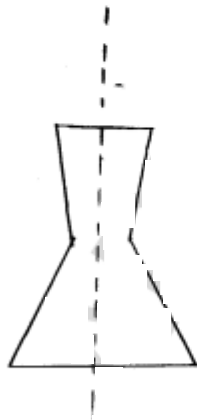
None

(vi)



None

(vii)



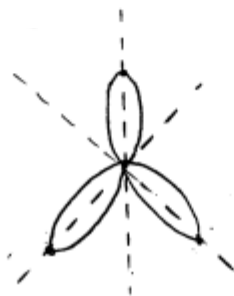
one Line of Symmetry.

(viii)



one Line of Symmetry.

(ix)



three Lines of Symmetry